



Green—You have 20p to spend. Cut out each item one at a time. Stick into your book. Draw how much change you are owed next to the item.

Green- Toy Shop Price List

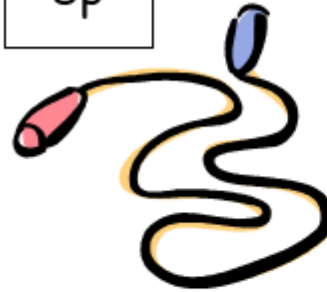
13p



7p




8p



15p




9p



11p



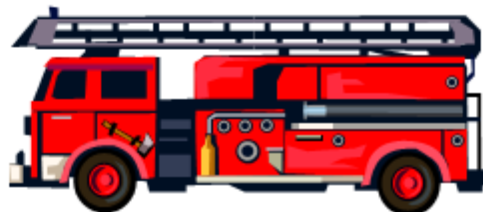
18p



12p



6p



14p





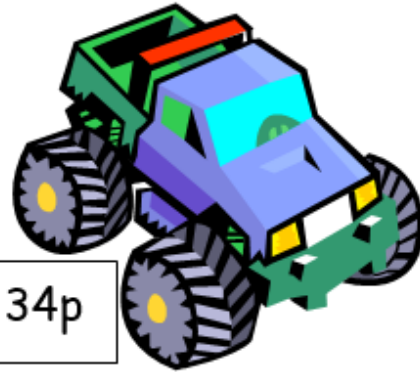
Orange—You have 50p to spend. Cut out each item one at a time. Stick into your book. Draw how much change you are owed next to the item.

Orange - Toy Shop Price List

43p



34p



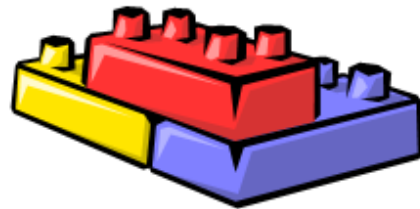
39p

26p



40p

28p



10p

31p





Red—You have £1 to spend. Cut out each item one at a time. Stick into your book. Draw how much change you are owed next to the item.

75p



Red -Toy Shop Price List



89p



17p

92p



42p



67p

68p



35p

