

Green

Rounding to the Nearest 10

Can you round these two-digit numbers to the nearest 10? Use the number lines to help you.



28 to the nearest 10 = 30



1. 32 to the nearest 10 = _____



2. 46 to the nearest 10 = _____



3. 54 to the nearest 10 = _____



4. 66 to the nearest 10 = _____



5. 71 to the nearest 10 = _____



6. 88 to the nearest 10 = _____



7. 93 to the nearest 10 = _____



8. 45 to the nearest 10 = _____



9. 44 to the nearest 10 = _____



10. 76 to the nearest 10 = _____

Rounding to the Nearest 10

Can you round these two-digit numbers to the nearest 10? Use the number lines to help you.



28 to the nearest 10 = 30



1. 32 to the nearest 10 = _____



2. 46 to the nearest 10 = _____



3. 54 to the nearest 10 = _____



4. 66 to the nearest 10 = _____



5. 71 to the nearest 10 = _____



6. 88 to the nearest 10 = _____



7. 93 to the nearest 10 = _____



8. 45 to the nearest 10 = _____



9. 44 to the nearest 10 = _____



10. 76 to the nearest 10 = _____

Dinosaur Themed Rounding to 10

Round the numbers below to the nearest 10. The first one has been done for you.

63 → 60

37 → _____

44 → _____

19 → _____

12 → _____

98 → _____

75 → _____


72 → _____

23 → _____

66 → _____

56 → _____

88 → _____



Red

The Nearest 10

Learning Objective:

To round to the nearest 10.

Write the tens either side of the given number and mark it approximately on the number line. Then circle the 10 to which the given number is closer. (Remember, 5 goes up.)

a) 41



g) 89



b) 34



h) 55




c) 12




i) 183




d) 99




j) 367



e) 105



k) 896



Space Themed Rounding to 10

Round the numbers below to the nearest 10. The first one has been done for you.

$243 = \underline{240}$

$185 = \underline{\quad}$

$297 = \underline{\quad}$

$561 = \underline{\quad}$

$188 = \underline{\quad}$

$616 = \underline{\quad}$

$765 = \underline{\quad}$

$322 = \underline{\quad}$

$625 = \underline{\quad}$

$101 = \underline{\quad}$

$147 = \underline{\quad}$

$474 = \underline{\quad}$

$911 = \underline{\quad}$

$349 = \underline{\quad}$

