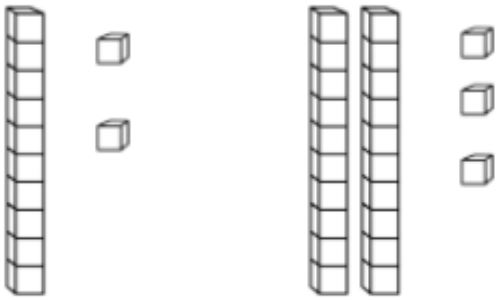


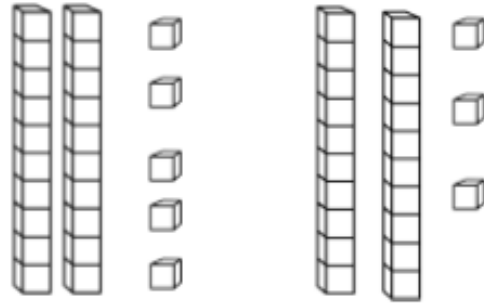
Green—Please copy these calculations into your maths book.

Addition With Base Ten Blocks

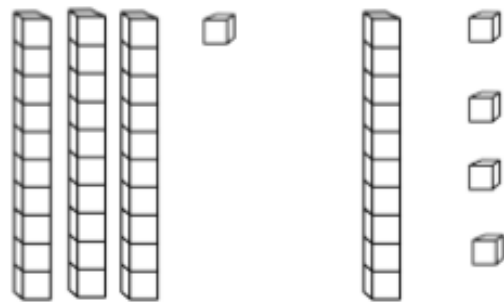
$12 + 23 =$



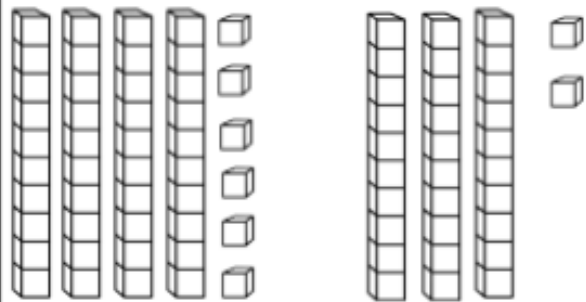
$25 + 23 =$



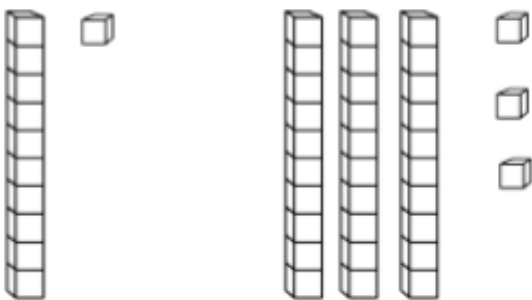
$31 + 14 =$



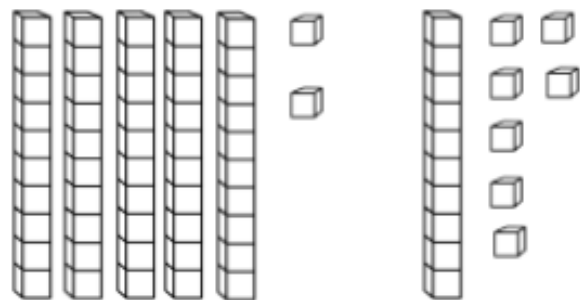
$46 + 32 =$



$11 + 33 =$



$52 + 17 =$



Orange—Please copy these calculations into your maths book.

1. $43 + 32 =$ _____

2. $34 + 22 =$ _____

3. $56 + 31 =$ _____

4. $52 + 37 =$ _____

5. $72 + 15 =$ _____

6. $63 + 24 =$ _____

7. $55 + 44 =$ _____

8. $37 + 21 =$ _____

9. $47 + 22 =$ _____

10. $62 + 33 =$ _____

11. $53 + 45 =$ _____

12. $76 + 12 =$ _____

Red—Please copy these calculations into your maths book.

Addition

$23 + 42 + 32 = \square$

$21 + 52 + 11 = \square$

$64 + 12 + 13 = \square$

$31 + 21 + 12 = \square$

$23 + 23 + 23 = \square$

$11 + 22 + 33 = \square$

$15 + 12 + 11 = \square$

$35 + 13 + 41 = \square$

$47 + 10 + 21 = \square$

$20 + 13 + 32 = \square$

$12 + 13 + 30 = \square$

$42 + 11 + 21 = \square$