


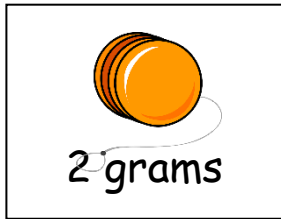
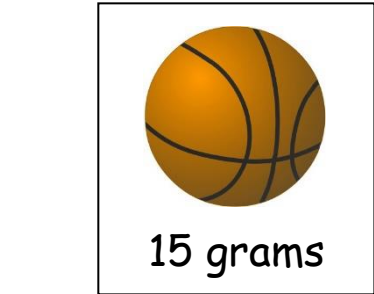
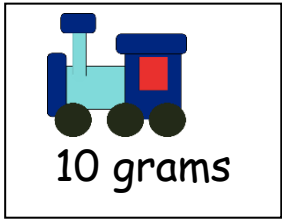






Cut out all of the pictures and put them in order from lightest to heaviest

If you fancy a challenge, have a look at the questions on the next sheet



### Challenge questions

Have a go at answering the questions below. Write your number sentences in the box for each question. Remember to start with the biggest number each time and write grams or g after each number.

1. How much do the cat and the toy car weigh together?

2. What is the total weight of the cat and the rocket?

3. Add together the weights of the football and bicycle.

4. How much do the skateboard, train and duck weigh altogether?

